




a5, b4, b6, c3, c7, d2, d8, e3, e7,
f4, f6, g5




c5, c6, d4, d7, e3, e6, f4, f7,
g5, g6



c4, c5, d4, d5, e4, e5, f4, f5



b3, c3, c4, d3, d5, e3, e6, f3,
f5, g3, g4, h3



Zamaluj pola wskazane pod każdą szachownicą.

Cwiczenie 3.